

## Reading

- How are the bears related? How old are they?
- What are they doing?
- How are they feeling?
- Is this a special moment?
- Why are there stars around them?



## Mental Maths and fluency

$$10 + 11 + 12$$


---

$$400 + \underline{\quad} = 478$$


---

What is 2 multiplied by 8?

---

50 subtract 46

---

## Spelling – focus -ar-

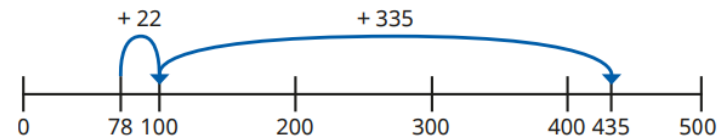
Circle the **-ar-** code in each word.

Tick the box for the sound it makes for each word.

	/er/	/ar/	/air/
separate			
dark			
January			
sugar			
party			

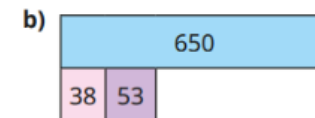

## Maths

Whitney uses a number line to show that  $435 - 78 = 357$



Explain what you think Whitney has done.

Find the missing values.



### History

Can you write a diary as if you were a child working in a factory in the 19<sup>th</sup> century?




### D&T

Can you draw your own cereal bar? Think about the design, the name of your cereal bar and the colours!




### Science

Can you describe each rock? What they look like and where might you find these rocks



### PSHE

Can you write a situation where you had to think about someone else's point of view?



### French

Can you match the name of the animals to their pictures?



un singe

une souris

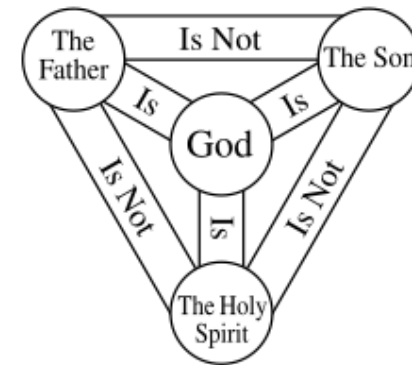
un canard

une vache

un mouton

### RE

Can you draw a picture to represent the Trinity?



Year 3's Home Learning

Homework due back on 20.11.24